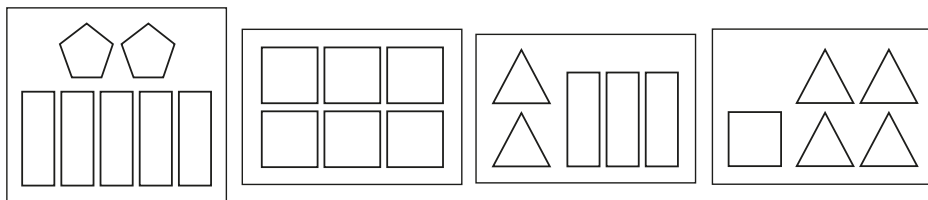
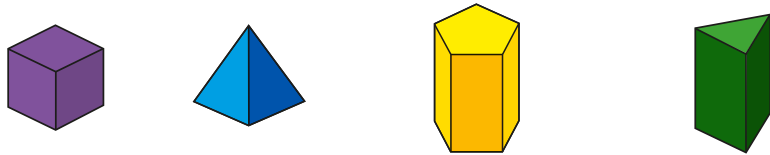






1 Match the shapes to the faces.



2 Complete the table.

Shape	Name	Number of faces
		
		
		
		

3



My shape has one curved surface.

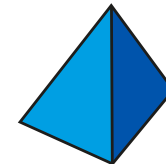
What shape is Jack describing?

4 Match the description to the shape.


1 circular face and
1 curved surface



2 circular faces and
1 curved surface



4 triangular faces



3




My shape has one curved surface.

What shape is Jack describing?

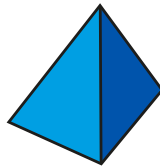
4

Match the description to the shape.

1 circular face and
1 curved surface




2 circular faces and
1 curved surface



4 triangular faces



5




A cube is the only 3D shape with 6 faces.

Alex has made a mistake.

Name another 3D shape that has 6 faces.

6

Dexter has 5 of the same 3D shapes.



In total, my shapes have 10 circular faces.

What shapes has Dexter got?

7

Dora wants to put a sticker on each face of some cubes.

She has 60 stickers.

How many cubes can she cover in stickers?

