

Homework Pack KS1

Pack 2

Addition / Fluency / 3 numbers

Subtraction / Find the Difference / Bonds

Times Tables / Counting in 2 5 10s

Ordering / Tens & Ones / Ordinal

Reading Phase 5 words Writing sentences

Adding adjectives

Tricky word spelling

Describe a scene / conjunctions / Describe it /
Write a list

Design / Colouring Challenge

PE Challenge

Addition: Fluency – How quickly can you solve these?

$3 + 3 = \square$

$2 + 5 = \square$

$4 + 7 = \square$

$8 + 7 = \square$

$6 + 3 = \square$

$8 + 4 = \square$

$5 + 6 = \square$

$7 + 6 = \square$

$5 + 8 = \square$

$3 + 10 = \square$

$5 + 7 = \square$

$4 + 9 = \square$

$12 + 6 = \square$

$13 + 8 = \square$

$10 + 7 = \square$

$14 + 8 = \square$

$6 + 12 = \square$

$13 + 8 = \square$

Addition: Add 3 numbers

$6 + 3 + 3 = \square$

$2 + 6 + 5 = \square$

$4 + 4 + 2 = \square$

$5 + 4 + 4 = \square$

$8 + 8 + 3 = \square$

$6 + 5 + 4 = \square$

$14 + 6 + 3 = \square$

$7 + 6 + 2 = \square$

$3 + 3 + 4 = \square$

$10 + 10 + 9 = \square$

$15 + 5 + 6 = \square$

Subtraction: Find the difference between them!

$6 - 5 = \square$

$10 - 9 = \square$

$8 - 6 = \square$

$9 - 7 = \square$

$14 - 12 = \square$

$15 - 13 = \square$

$20 - 18 = \square$

$24 - 5 = \square$

$25 - 4 = \square$



Bonds to 10!

$6 + \square = 10$

$7 + \square = 10$

$9 + \square = 10$

$15 + \square = 20$

$13 + \square = 20$

$18 + \square = 20$

$22 + \square = 30$

$27 + \square = 30$

$29 + \square = 30$

Mix up!

$23 + 4 = \square$

$15 - 10 = \square$

$8 + 10 = \square$

$22 + 10 = \square$

$25 - 24 = \square$

$29 - 8 = \square$

$12 + 12 = \square$

$15 + 10 = \square$

$24 + 20 = \square$

Times Tables Challenge 10x

$3 \times 10 = \square$

$6 \times 10 = \square$

$4 \times 10 = \square$

$7 \times 10 = \square$

$5 \times 10 = \square$

$\square \times 10 = 80$

$10 \times 10 = \square$

$\square \times 10 = 0$

$12 \times 10 = \square$



Times Tables Challenge 2x

$3 \times 2 = \square$

$4 \times 2 = \square$

$5 \times 2 = \square$

$10 \times 2 = \square$

$0 \times 2 = \square$

$\square \times 2 = 30$

$12 \times 2 = \square$

$\square \times 2 = 22$

$7 \times 2 = \square$

Times Tables Challenge 5x



$3 \times 5 = \square$

$5 \times 5 = \square$

$0 \times 5 = \square$

$4 \times 5 = \square$

$\square \times 5 = 10$

$\square \times 5 = 30$

$10 \times 5 = \square$

$\square \times 5 = 20$

$11 \times 5 = \square$

Put these numbers in order –Biggest to smallest!

15	25	7	2	16	28

Well done! 

13	8	3	8	18	14

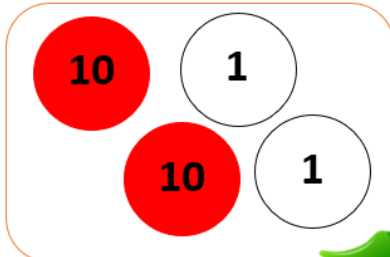
 **Keep going!**

22	8	25	28	23	1

TENS AND ONES

PLACE VALUE PROBLEMS

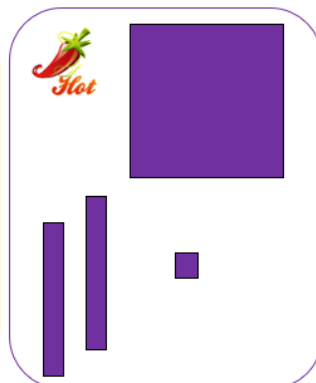


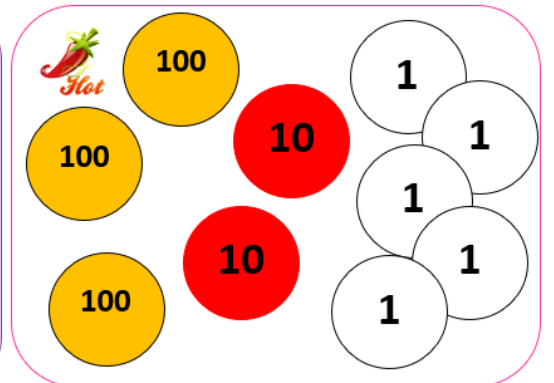












PLACE VALUE PROBLEMS

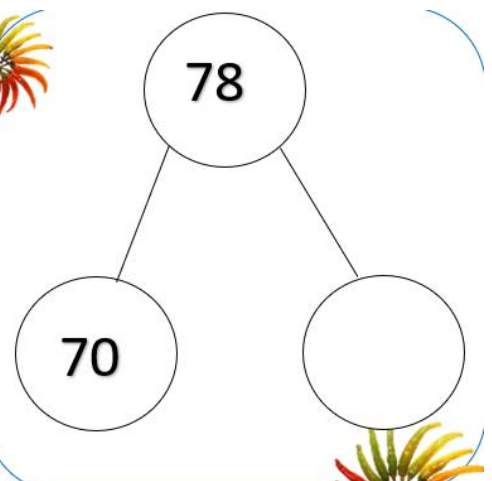
$$40 + 2 =$$

$$30 + 5 =$$


$$60 + 6 =$$

$$300 + 60 =$$

What is the
4 worth in
349?



Partition this number into
H, T and O.



DRAW 481

$$34 + 100 =$$

$$60 + 7 =$$

$$2 + 30 =$$

$$900 + 99 + 1 =$$

Ordinal Numbers :

Tick the 4th car



Tick the 2nd ice cream



Tick the 5th sock



Tick the 7th flower



Revisit Phase 5 sound: ph

Can you read these words?

phone

ph

nephew

photograph

graph

dolphin

microphone

Phillip

elephant

phonics

alphabet

Do you remember that f and ff also says this sound!

Can you read these words?

finish

fluffy

feather

puff

fresh

cliff

different

coffee


friendly

huff

Choose 3 PH words and write them into sentences!

Make them sound amazing! I have done one for you!

I spoke to my fabulous friend Phillip on the phone on Friday and he sent me a selfie of him with an elephant and a dolphin.



Your go!

1

2

3


WRITING TASK

Write some amazing sentences here!

Can you add an adjective or 2?



The **fresh, green** leaf flag landed on top of the **yellow** tent.



TRICKY WORD READING:

Colour the tricky words if you know them!

When you know them all, select 5 and write 5 sentences on the next page.

looked

some

come

children

there

called

little

asked

when

should

could

Mrs

they

come

some

after

people

animals

every

have

they

TRICKY WORD SENTENCES!

1

2

3

4

5

What words do you think about when you see this picture?

exciting

candy floss



family

WRITE ABOUT THIS SCENE: Let's pretend!

Use your senses! What can you hear? What can you smell? What can you taste? See?



CONJUNCTIONS



Read the sentences below and write in the missing conjunction!

I like cream cakes _____ sandwiches.

The tall boy went home _____ he was feeling poorly.

I am really tired _____ I am going to have a little rest.

I am really good at running _____ I am good at jumping.

I really enjoy apples _____ I do not like bananas.

I love walking everyday _____ it makes me feel healthy.

I really miss my friend _____ I am going to write him a letter.

Write - Use your imagination!

Tell me about this object.....



- What is it?
- What does it look like?
- What is it made of?
- What is it used for?

WRITE: Write a list of fruits and vegetables! How many can you think of in 3 minutes?

[illegible]

DESIGN: Can you design a futuristic house?

Design a House



What will you
need?




JUST FOR FUN:

How many of these can you tick today?



Take your pick

- Learn a card trick
- Read a book
- Go for a walk and do some star jumps
- Watch a game show
- Learn 5 capital cities
- Try a new food
- Learn a simple dance
- Draw a picture of an animal
- Play outside
- Find out how to say hello in 5 languages
- Draw a picture of a famous landmark
- Write a letter to your teacher



COLOURING CHALLENGE:



PE Challenge:



Do 10 lunges



30 second plank



20 high knees



Create a simple obstacle course



Design a fruit salad



Do a Joe Wicks workout